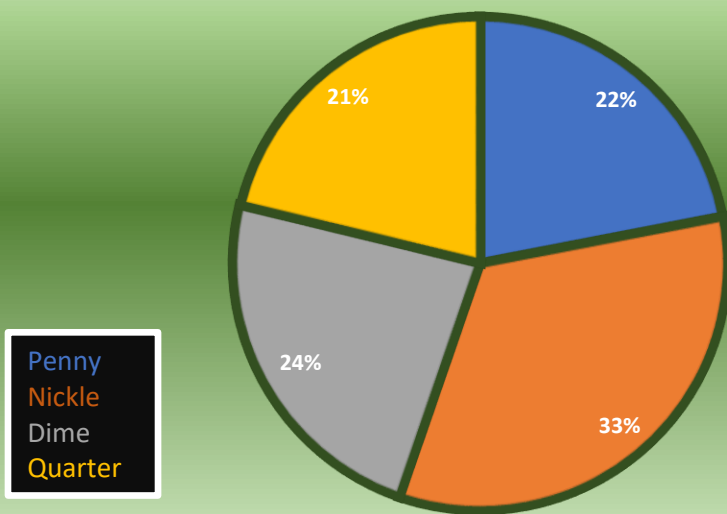


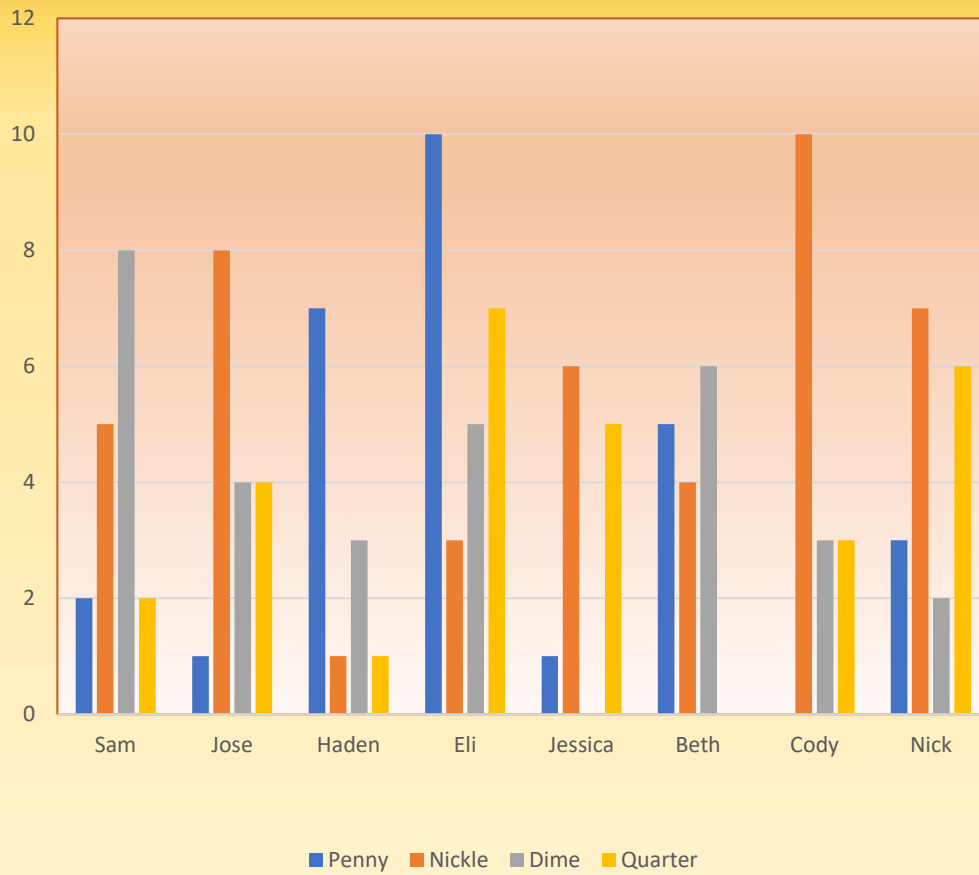
What coins do you have?

Students	Penny	Nickle	Dime	Quarter	Total
Sam	2	5	8	2	17
Jose	1	8	4	4	17
Haden	7	1	3	1	12
Eli	10	3	5	7	25
Jessica	1	6	0	5	12
Beth	5	4	6	0	15
Cody	0	10	3	3	16
Nick	3	7	2	6	18
TOTAL	29	44	31	28	132

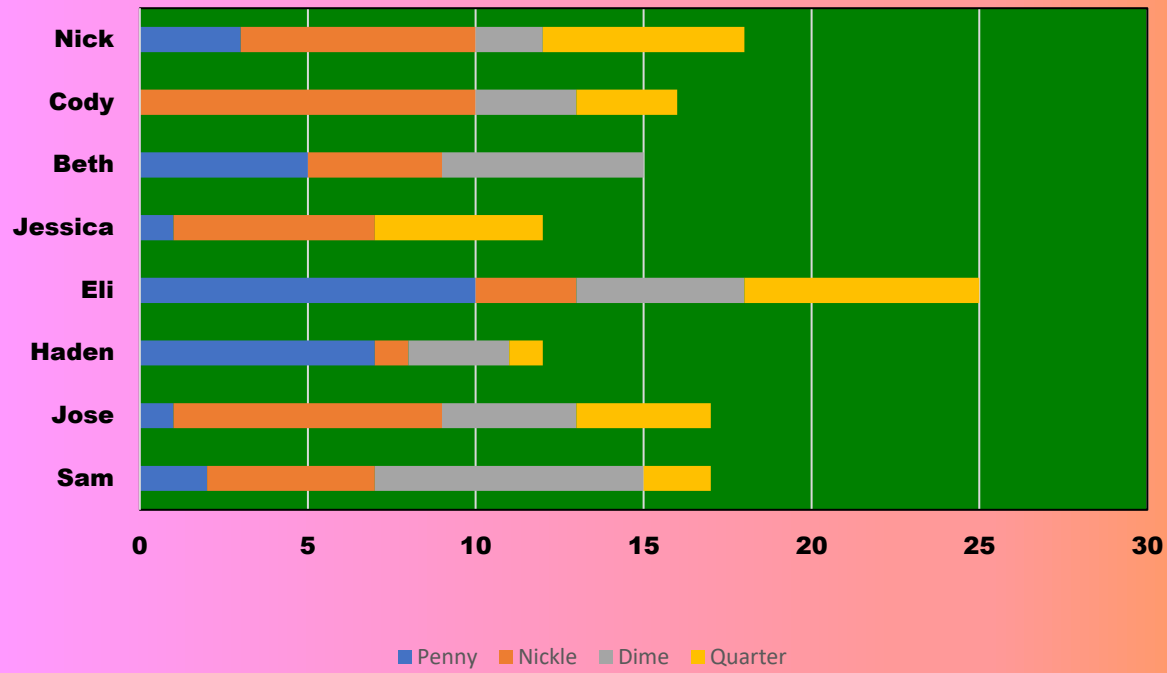
WHAT PERCENTAGE OF COINS?



What Coins Do You Have?



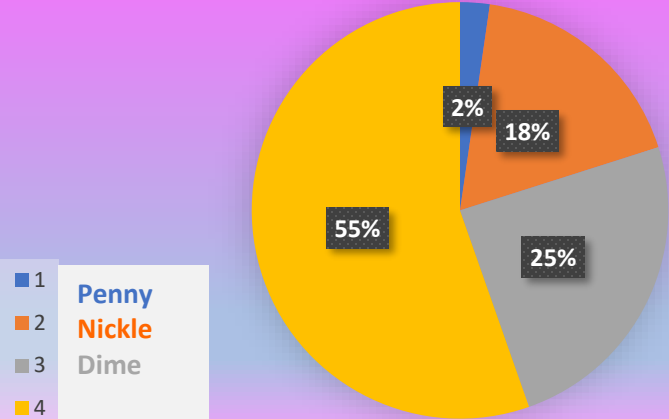
What Coins Do You Have?



How much money do you have?

Students	Penny	Nickle	Dime	Quarter	Total
Sam	\$0.02	\$0.25	\$0.80	\$0.50	\$1.57
Jose	\$0.01	\$0.40	\$0.40	\$1.00	\$1.81
Haden	\$0.07	\$0.10	\$0.30	\$0.25	\$0.72
Eli	\$0.10	\$0.15	\$0.50	\$1.75	\$2.50
Jessica	\$0.01	\$0.30	\$0.00	\$1.25	\$1.56
Beth	\$0.05	\$0.20	\$0.60	\$0.00	\$0.85
Cody	\$0.00	\$0.50	\$0.30	\$0.75	\$1.55
Nick	\$0.03	\$0.35	\$0.20	\$1.50	\$2.08
TOTAL	\$0.29	\$2.25	\$3.10	\$7.00	\$12.64

What coin has the most?



How much money do you have?

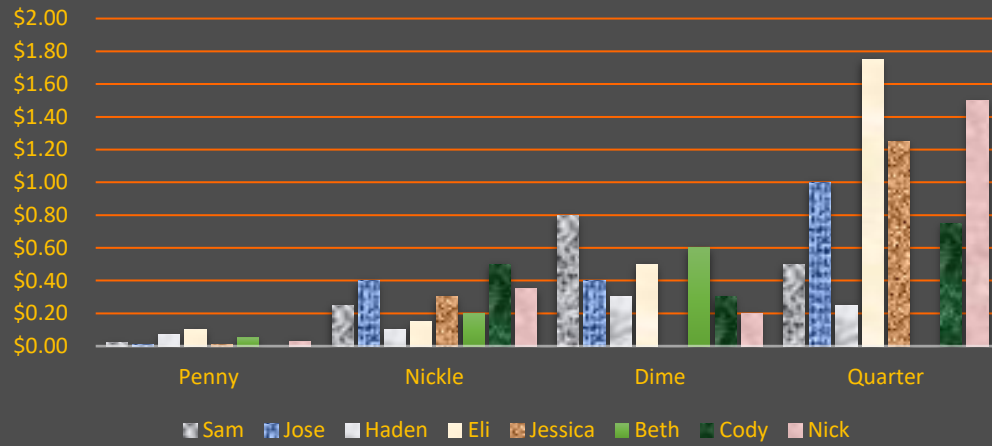
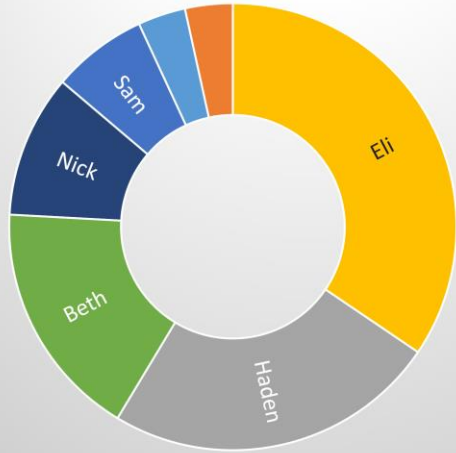


Chart Title

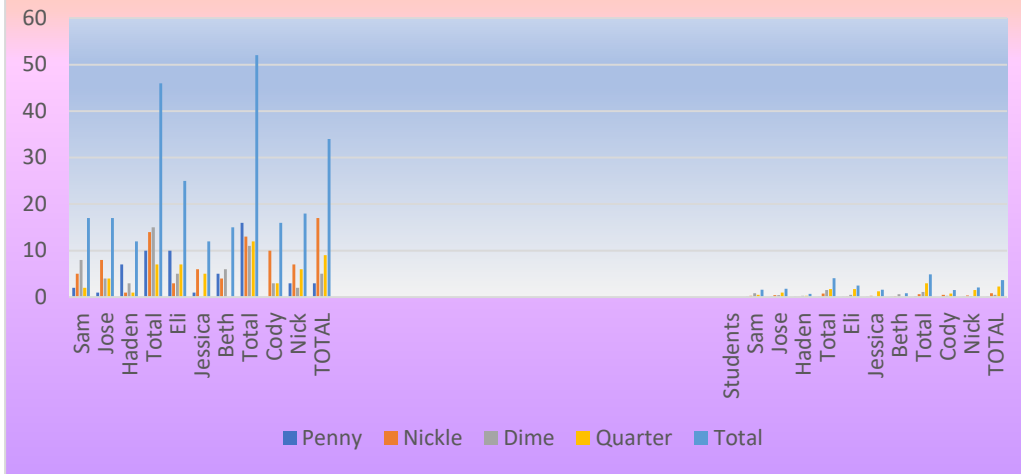


- Sam
- Jose
- Haden
- Eli
- Jessica
- Beth
- Cody
- Nick

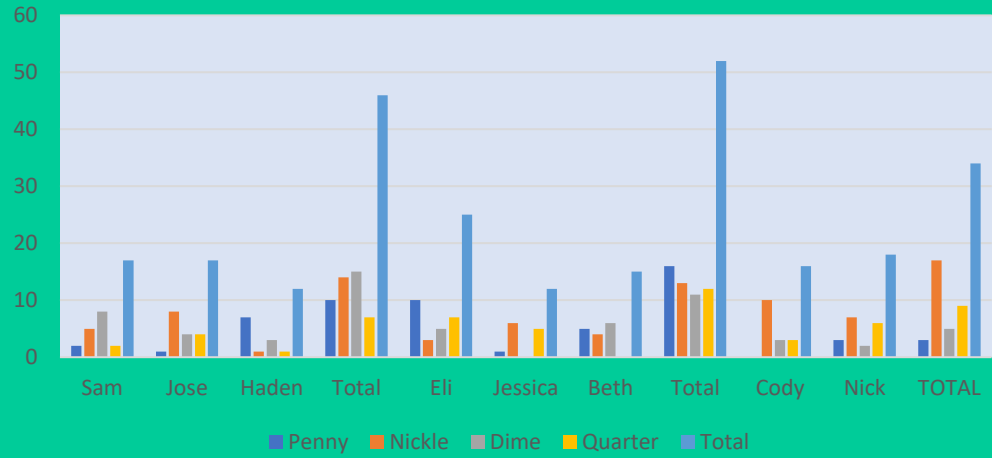
Students	Penny	Nickle	Dime	Quarter	Total
Sam	2	5	8	2	17
Jose	1	8	4	4	17
Haden	7	1	3	1	12
Total	10	14	15	7	46
Eli	10	3	5	7	25
Jessica	1	6	0	5	12
Beth	5	4	6	0	15
Total	16	13	11	12	52
Cody	0	10	3	3	16
Nick	3	7	2	6	18
TOTAL	3	17	5	9	34

Students	Penny	Nickle	Dime	Quarter	Total
Sam	\$0.02	\$0.25	\$0.80	\$0.50	\$1.57
Jose	\$0.01	\$0.40	\$0.40	\$1.00	\$1.81
Haden	\$0.07	\$0.10	\$0.30	\$0.25	\$0.72
Total	\$0.10	\$0.75	\$1.50	\$1.75	\$4.10
Eli	\$0.10	\$0.15	\$0.50	\$1.75	\$2.50
Jessica	\$0.01	\$0.30	\$0.00	\$1.25	\$1.56
Beth	\$0.05	\$0.20	\$0.60	\$0.00	\$0.85
Total	\$0.16	\$0.65	\$1.10	\$3.00	\$4.91
Cody	\$0.00	\$0.50	\$0.30	\$0.75	\$1.55
Nick	\$0.03	\$0.35	\$0.20	\$1.50	\$2.08
TOTAL	\$0.03	\$0.85	\$0.50	\$2.25	\$3.63

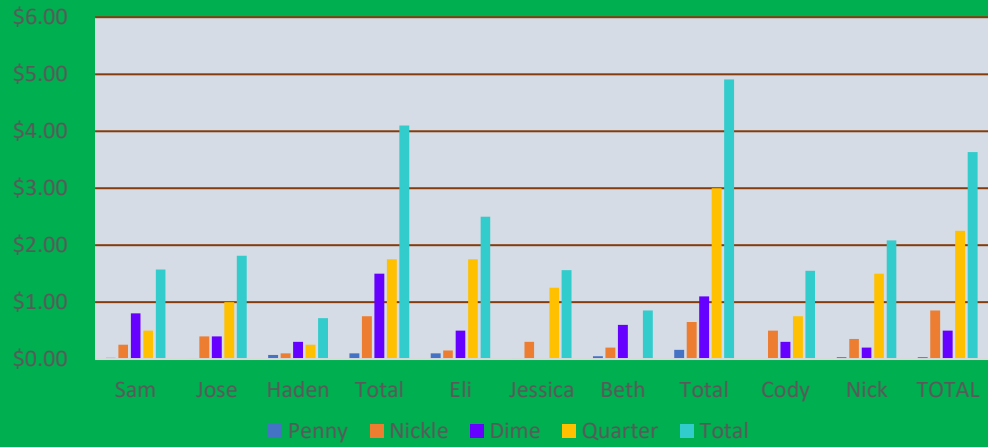
Comparison Graph



How many coins does your group have?

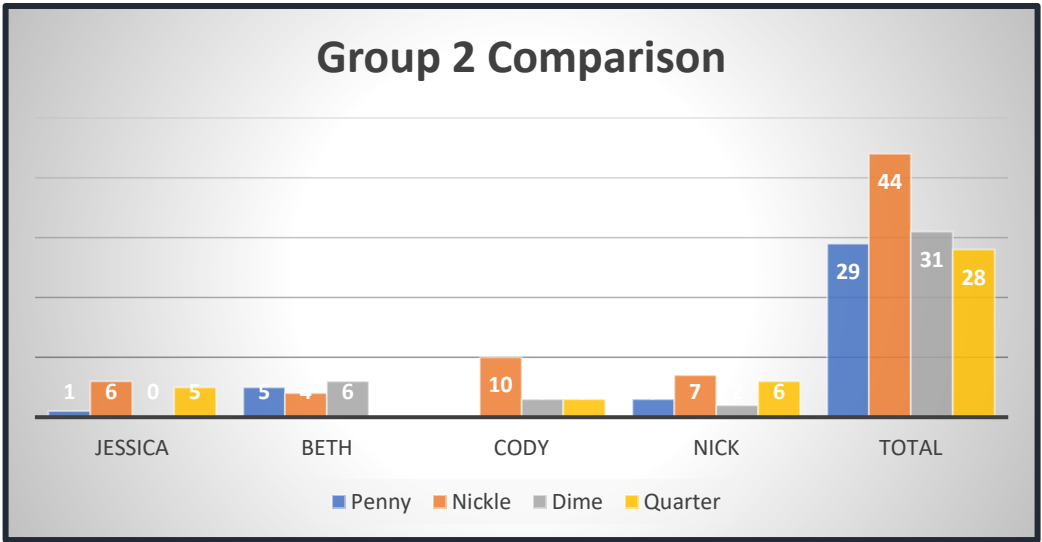
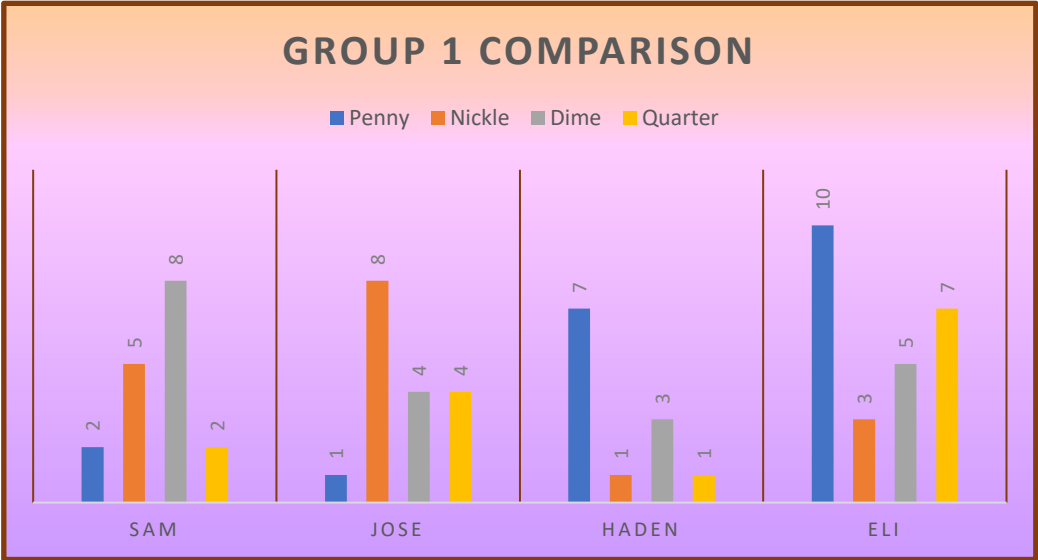


How much money does your group have?

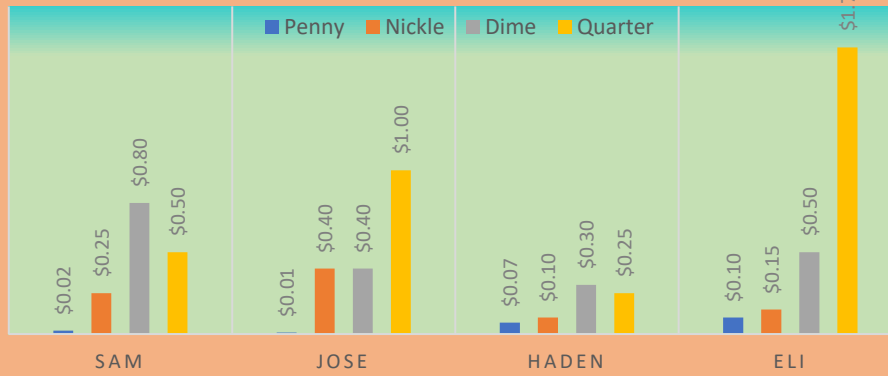


Students	Penny	Nickle	Dime	Quarter	Total
Sam	2	5	8	2	17
Jose	1	8	4	4	17
Haden	7	1	3	1	12
Eli	10	3	5	7	25
Jessica	1	6	0	5	12
Beth	5	4	6	0	15
Cody	0	10	3	3	16
Nick	3	7	2	6	18
TOTAL	29	44	31	28	132

Students	Penny	Nickle	Dime	Quarter	Total
Sam	\$0.02	\$0.25	\$0.80	\$0.50	\$1.57
Jose	\$0.01	\$0.40	\$0.40	\$1.00	\$1.81
Haden	\$0.07	\$0.10	\$0.30	\$0.25	\$0.72
Eli	\$0.10	\$0.15	\$0.50	\$1.75	\$2.50
Jessica	\$0.01	\$0.30	\$0.00	\$1.25	\$1.56
Beth	\$0.05	\$0.20	\$0.60	\$0.00	\$0.85
Cody	\$0.00	\$0.50	\$0.30	\$0.75	\$1.55
Nick	\$0.03	\$0.35	\$0.20	\$1.50	\$2.08
TOTAL	\$0.29	\$2.25	\$3.10	\$7.00	\$12.64



GROUP 1 COMPARISON MONEY



GROUP 2 COMPARISON MONEY

